













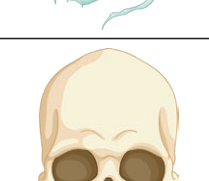
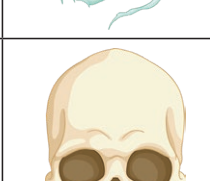


Halloween Algebra

Bronze















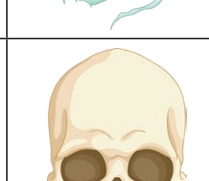
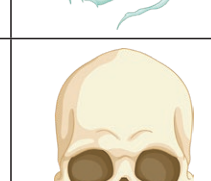
Each symbol has a numerical value. The totals for the symbols are written at the ends of each row and column. Calculate the value of each symbol. The value of the witch has been given to get you started.

 3	 3		 3	11
			 3	15
	 3			10
	 3			8
11	14	10	9	

Halloween Algebra

Bronze

Each symbol has a numerical value. The totals for the symbols are written at the ends of each row and column. Calculate the value of each symbol. The value of the witch has been given to get you started.

 3	 3		 3	11
			 3	15
	 3			10
	 3			8
11	14	10	9	



Maths

visit [twinkl.com](https://www.twinkl.com)





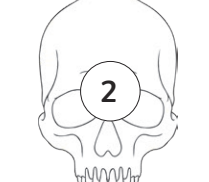

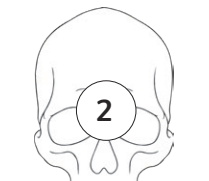









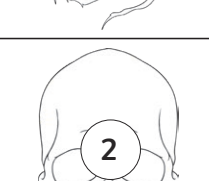
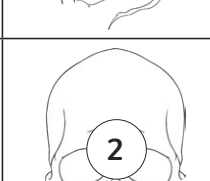
Maths

visit [twinkl.com](https://www.twinkl.com)



Halloween Algebra Answers Bronze

Each symbol has a numerical value. The totals for the symbols are written at the ends of each row and column. Calculate the value of each symbol. The value of the witch has been given to get you started.

 3	 3	 2	 3	11
 2	 5	 5	 3	15
 5	 3	 1	 1	10
 1	 3	 2	 2	8
11	14	10	9	



Maths

visit [twinkl.com](https://www.twinkl.com)



Maths

visit [twinkl.com](https://www.twinkl.com)

